
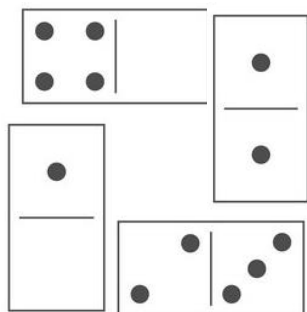





PRÍLOHA C Pracovný list: Matematika bez počítača – Riešenie úloh

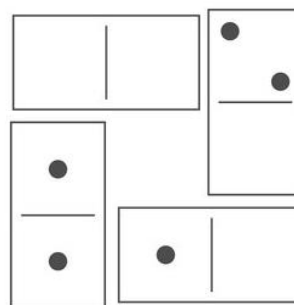
Ú1.1: Napríklad:



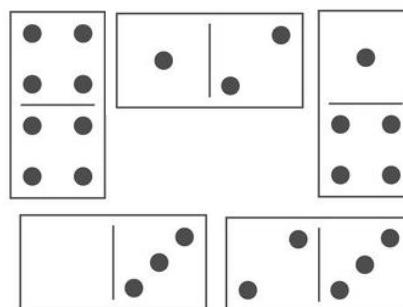
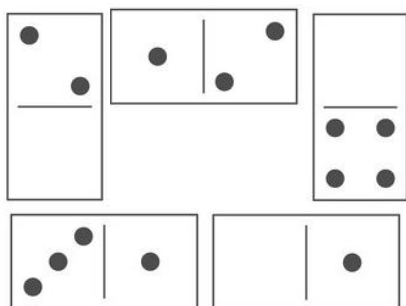
Ú1.2: Najväčší 16



Najmenší 2




Ú1.3: Napríklad:



Ú2.1: Napríklad:

$$\begin{array}{|c|} \hline \bullet \\ \hline \bullet \bullet \\ \hline \bullet \bullet \end{array} + \begin{array}{|c|} \hline \bullet \\ \hline \bullet \bullet \\ \hline \bullet \bullet \end{array} + \begin{array}{|c|} \hline \bullet \bullet \\ \hline \bullet \bullet \\ \hline \bullet \bullet \end{array} + \begin{array}{|c|} \hline \bullet \\ \hline \bullet \bullet \\ \hline \bullet \bullet \end{array} + \begin{array}{|c|} \hline \bullet \bullet \\ \hline \bullet \bullet \\ \hline \bullet \bullet \end{array} = 4$$

Ú2.2: Napríklad:



$$+ + + + = 10$$

Ú2.3: Například:

Ú3.1:

Ú3.2: Treba doplniť tabličku:

